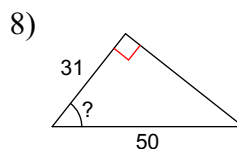
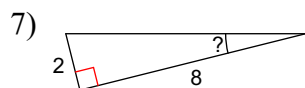
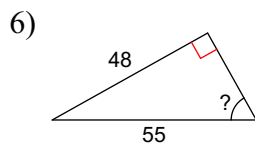
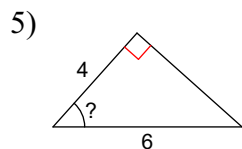
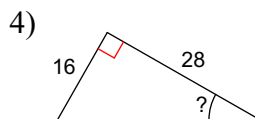
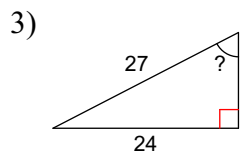
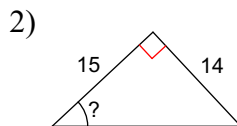
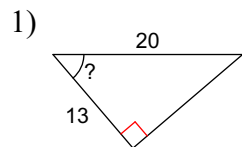


### 3-5 Trig Missing Angles and Sides

**Find the measure of the indicated angle to the nearest degree.**



**Find the missing side. Round to the nearest tenth.**

